



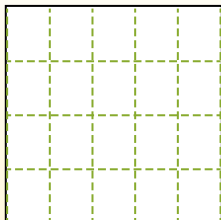
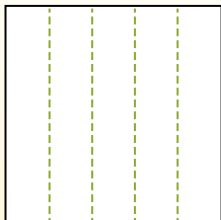

Partition the shape as described and then count to find the number of boxes.

Answers

Rows go left to right.


Columns go up and down.

This has 4 rows and 5 columns.
There are 20 boxes total.




1. _____
2. _____
3. _____
4. _____
5. _____
6. _____
7. _____
8. _____
9. _____


1) 4 rows
4 columns




2) 4 rows
2 columns




3) 2 rows
3 columns



4) 3 rows
4 columns




5) 4 rows
3 columns




6) 3 rows
5 columns




7) 2 rows
2 columns



8) 3 rows
2 columns



9) 2 rows
5 columns



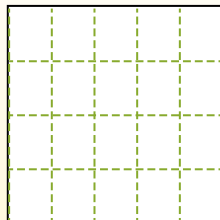
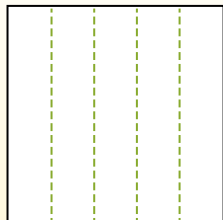



Partition the shape as described and then count to find the number of boxes.

Rows go left to right.


Columns go up and down.

This has 4 rows and 5 columns.
There are 20 boxes total.

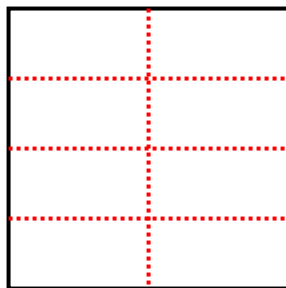


Answers

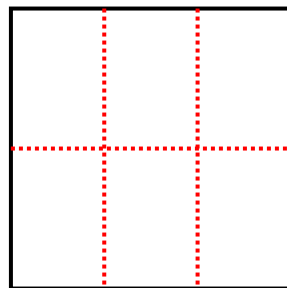
1) 4 rows
4 columns



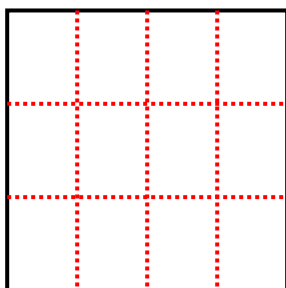
2) 4 rows
2 columns



3) 2 rows
3 columns



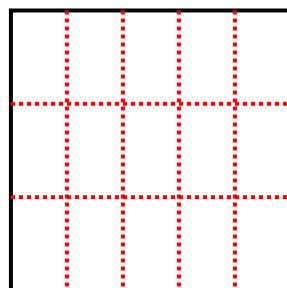
4) 3 rows
4 columns



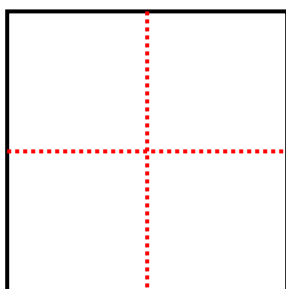
5) 4 rows
3 columns



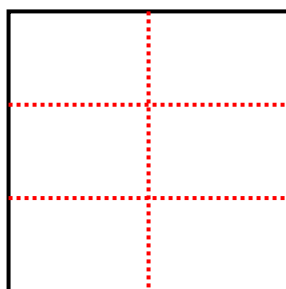
6) 3 rows
5 columns



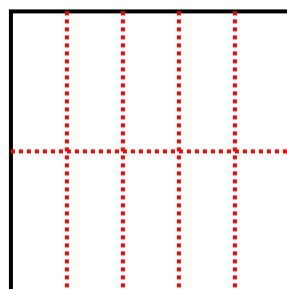
7) 2 rows
2 columns



8) 3 rows
2 columns



9) 2 rows
5 columns



- 1. 16
- 2. 8
- 3. 6
- 4. 12
- 5. 12
- 6. 15
- 7. 4
- 8. 6
- 9. 10